

Discovering Africa



Google Earth




360cities.net

In what ways do you think much of Africa makes money?

Kenya's economy - pg. 405 - 406 (**Our World Today**)



Tourism



Activity - Tour of Africa



Directions:

You are going to be given a number.

Your number will be assigned to a specific part of Africa that is going to be on our tour.

Read about this tourist place, and think of 5 facts and 3 opinions to write about it. You and your other members of your group will then be our tour guides for your part of the trip.

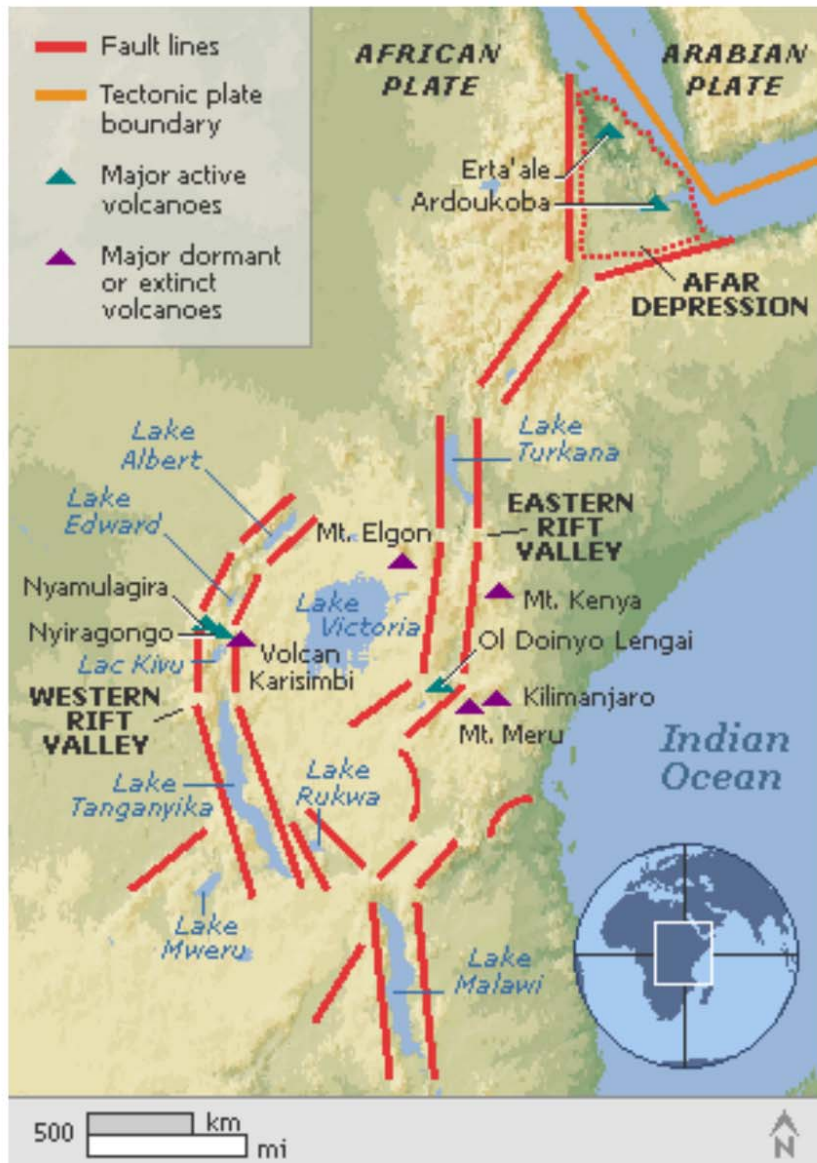
Our World Today Pg. 404

1. Great Rift Valley
2. Mt. Kenya
3. Safari
4. Swahili language
5. Serengeti Plain
6. Kilimanjaro



1

Great Rift Valley









2

Mt. Kenya







Photograph by Bobby Model

 NATIONAL
GEOGRAPHIC

© 2007 National Geographic Society. All rights reserved.

3

African Safaris

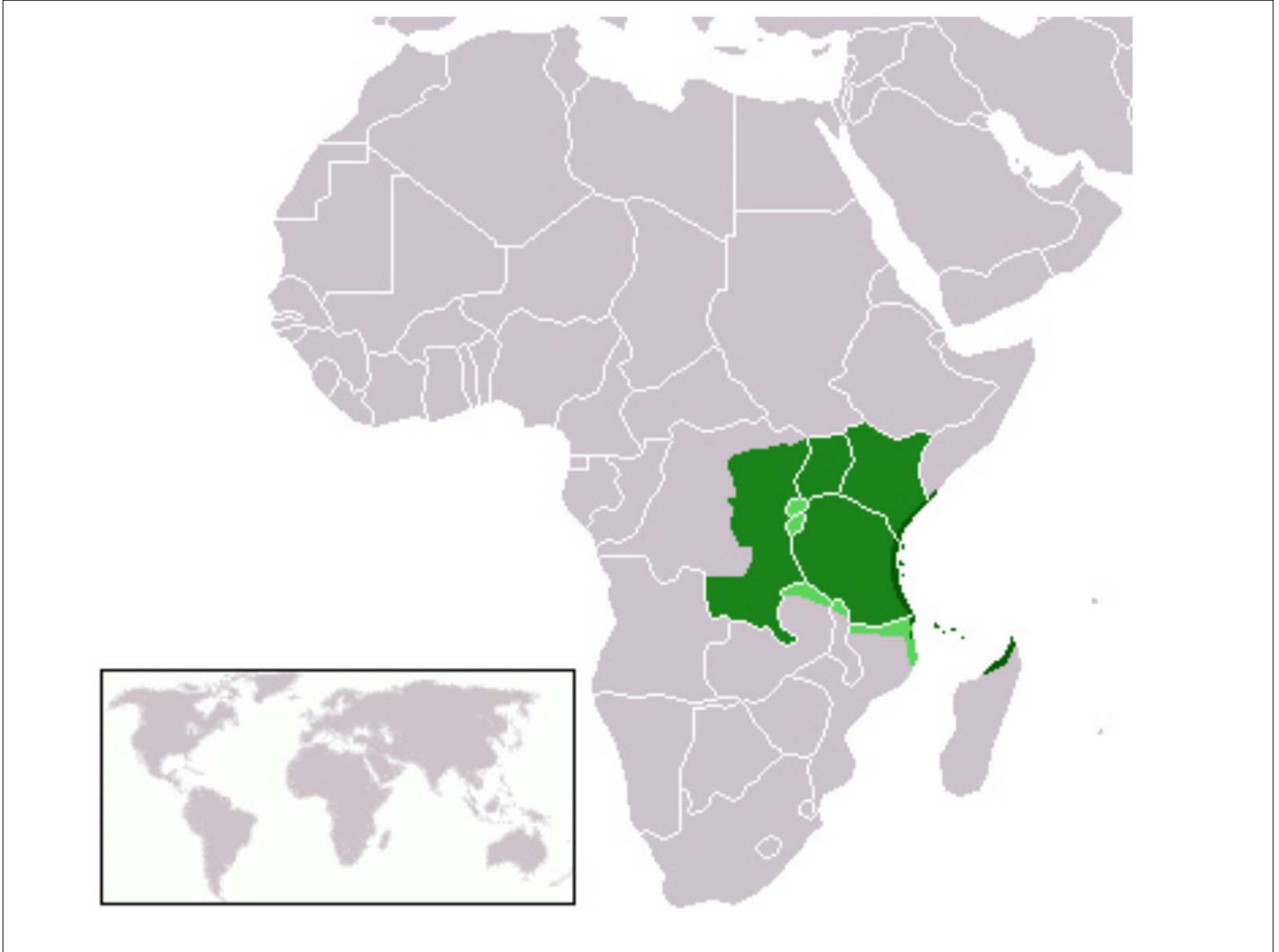






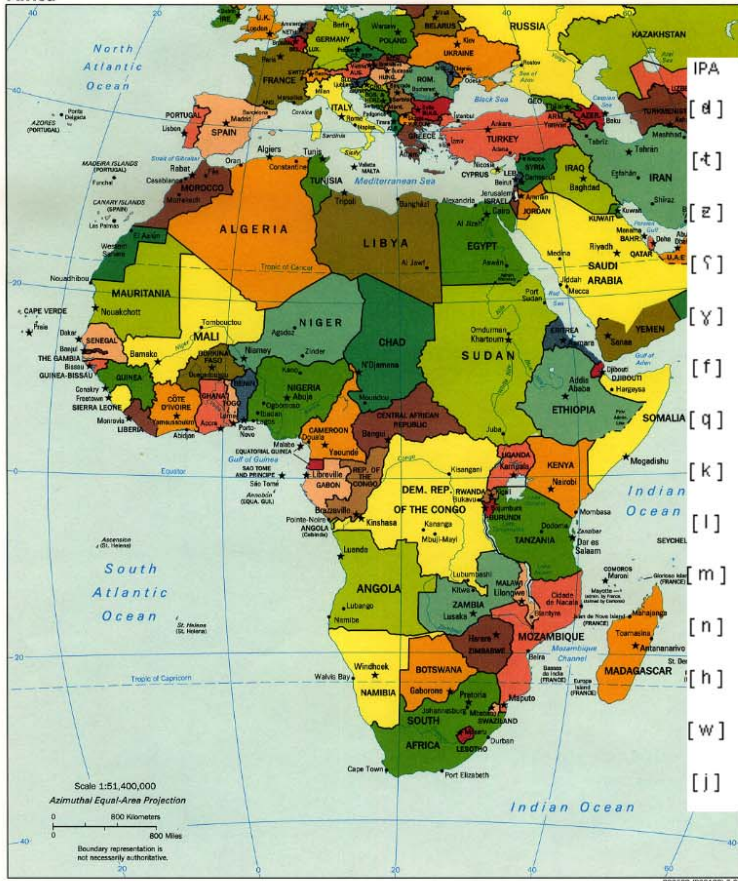
4

Swahili Language




African + Arabic

Africa



IPA	Value	Name	Final	Medial	Initial	Isolated	IPA	Value	Name	Final	Medial	Initial	Isolated
[ʔ]	ʔ	qāf	ض	ض	ض	ض	[ʔ]	'(a)	alif	ا	-	-	ا
[t]	t	tā'	ط	ط	ط	ط	[b]	b	bā'	ب	ب	ب	ب
[z]	z	zā'	ظ	ظ	ظ	ظ	[t]	t	tā'	ت	ت	ت	ت
[ʕ]	ʕ	'ayn	ع	ع	ع	ع	[θ]	th	thā'	ث	ث	ث	ث
[ɣ]	gh	ghayn	غ	غ	غ	غ	[ʒ]	j	jīm	ج	ج	ج	ج
[f]	f	fā'	ف	ف	ف	ف	[h]	h	hā'	ح	ح	ح	ح
[q]	q	qāf	ق	ق	ق	ق	[x]	kh	khā'	خ	خ	خ	خ
[k]	k	kāf	ك	ك	ك	ك	[d]	d	dāl	د	-	-	د
[l]	l	lām	ل	ل	ل	ل	[ð]	dh	dhāl	ذ	-	-	ذ
[m]	m	mīm	م	م	م	م	[r]	r	rā'	ر	-	-	ر
[n]	n	nūn	ن	ن	ن	ن	[z]	z	zāy	ز	-	-	ز
[h]	h	hā'	ه	ه	ه	ه	[s]	s	sīn	س	س	س	س
[w]	w	wāw	و	-	-	و	[ʃ]	š	shīn	ش	ش	ش	ش
[j]	y	yā'	ي	ي	ي	ي	[s]	ṣ	ṣād	ص	ص	ص	ص



5

Serengeti Plain







6

Kilimanjaro





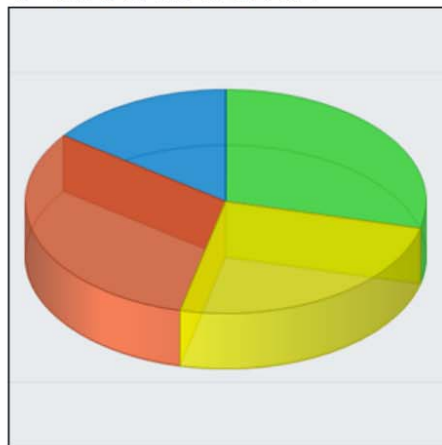


The Facts:

The average acre of land in Kenya used for farming is valued at \$0.36.

The average acre of land in Kenya used for tourism is valued at \$18.

Make a pie chart showing how you feel the land in many African countries should be distributed.



Pie chart should include the following categories:

1. Tourism 2. Farming 3. Housing 4. Business

Things to consider -

People need to eat!

What may happen if tourism is down a year? up a year?

Check for Understanding

1. The fault that begins in SE Africa and stretches about 3000 miles north to the Red Sea is the...

- a. Nile River Valley
- b. Congo River Valley
- c. Great Rift Valley
- d. Ubangi River Valley



Fossils of the earliest human ancestors have been found in...

- a. Mt. Kilimanjaro
- b. Great Rift Valley
- c. Kenyas coral reef
- d. The Equatorial Plain



The fastest growing industry in Kenya and Tanzania is...



African Language + Arabic Language = ?

Tourist flock to Tanzanias famous wildlife preserve in...

a. The Serengeti Plain

b. Mt. Kilimanjaro

c. The Great Savanna

d. The Equatorial Plain

